

Quick comments about the glider system

Example. The glider

$$\begin{aligned}\frac{dy}{dt} &= \frac{-\cos y + v^2}{v} \\ \frac{dv}{dt} &= -\sin y - Dv^2\end{aligned}$$

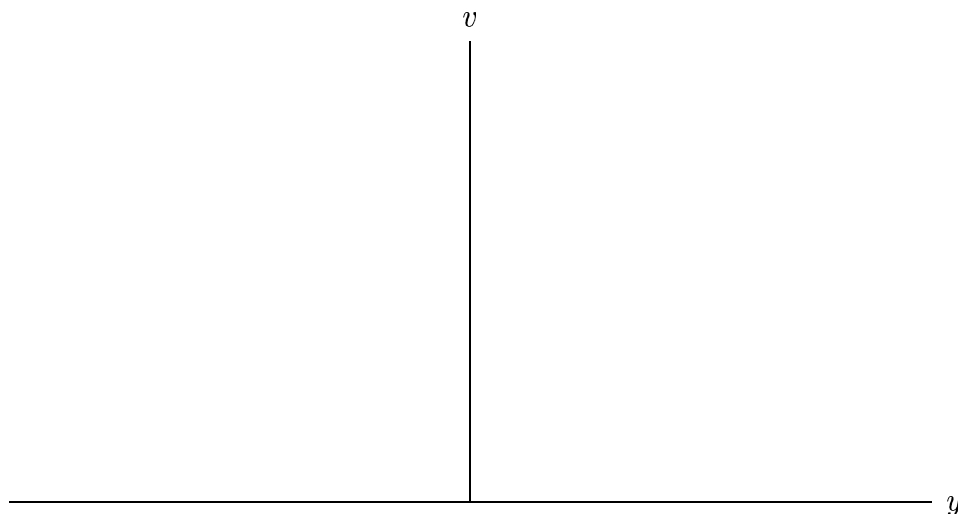
where D is a drag parameter.

Last class we determined that this system has one equilibrium solution for each value of the drag parameter D . Considered as an initial condition, this solution has a solution curve that is just the point

$$(y_0, v_0) = \left(-\arctan D, \frac{1}{\sqrt{1+D^2}} \right).$$

This point is called an equilibrium point for the system.

Here's the phase portrait for the special case where $D = 0$.



One skill that you will learn is how to make a rough sketch of the component graphs from the solution curve. There is a tool on your CD called `DESket chPad` which will help you practice.

The vector field of an autonomous system

We get a better geometric understanding of the solutions of a first-order system if we convert the system into a vector equation.

Example 1. Once again we consider a simple mass-spring system

$$\begin{aligned}\frac{dy}{dt} &= v \\ \frac{dv}{dt} &= -y.\end{aligned}$$

By some intelligent guessing we know a few solutions. One is

$$(y(t), v(t)) = (\cos t, -\sin t).$$

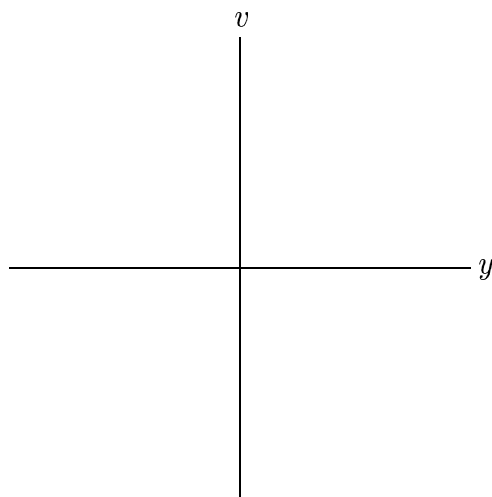
We rewrite this system and the solution in terms of vectors:

Now for the geometric interpretation of

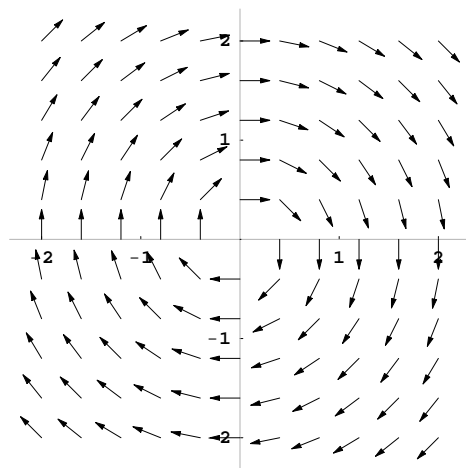
$$\frac{d\mathbf{Y}}{dt} = \mathbf{F}(\mathbf{Y}),$$

where

$$\mathbf{F}(\mathbf{Y}) = \mathbf{F} \begin{pmatrix} y \\ v \end{pmatrix} = \begin{pmatrix} v \\ -y \end{pmatrix}.$$



The direction field associated with this system is



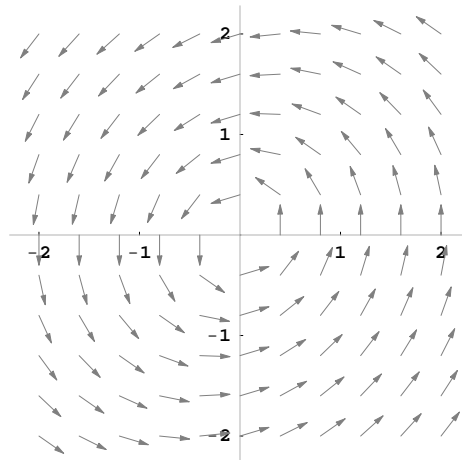
Example 2. Consider the system

$$\begin{aligned}\frac{dx}{dt} &= -y \\ \frac{dy}{dt} &= x - 0.3y.\end{aligned}$$

The vector field associated with this system is

$$\mathbf{F}(\mathbf{Y}) = \mathbf{F} \begin{pmatrix} x \\ y \end{pmatrix} = \begin{pmatrix} -y \\ x - 0.3y \end{pmatrix}.$$

Here's the direction field:



Consider the following 8 first-order systems:

1. $\frac{dx}{dt} = -x$

$\frac{dy}{dt} = y^2 - 1$

2. $\frac{dx}{dt} = -2x$

$\frac{dy}{dt} = -y$

3. $\frac{dx}{dt} = -x - 2y$

$\frac{dy}{dt} = y$

4. $\frac{dx}{dt} = 1 - y$

$\frac{dy}{dt} = 1 + x$

5. $\frac{dx}{dt} = x$

$\frac{dy}{dt} = 2x - y$

6. $\frac{dx}{dt} = y - 1$

$\frac{dy}{dt} = -1 - x$

7. $\frac{dx}{dt} = -x$

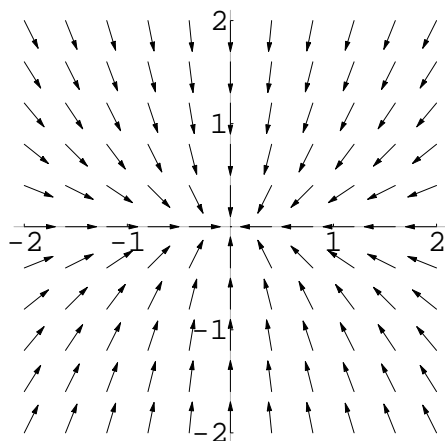
$\frac{dy}{dt} = -2y$

8. $\frac{dx}{dt} = x^2 - 1$

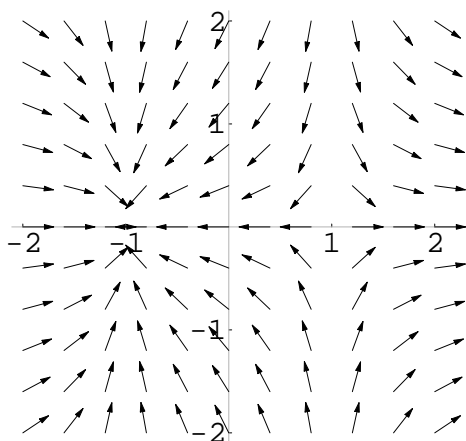
$\frac{dy}{dt} = -y$

Four of the associated direction fields are shown below. Pair the direction fields with their associated systems. Provide a brief justification for your choice.

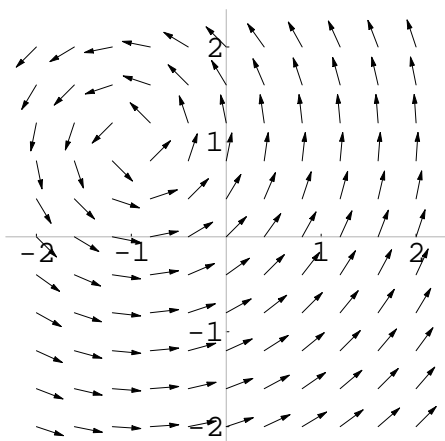
Direction Field A



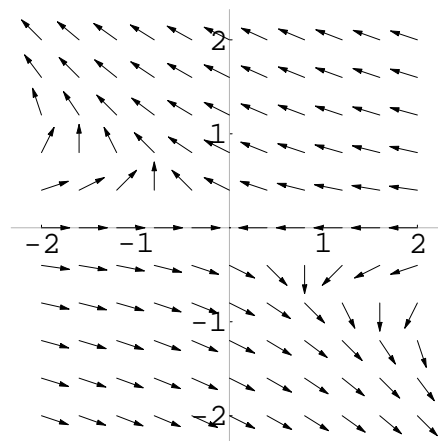
Direction Field B



Direction Field C



Direction Field D



Analytic Techniques:

There are few analytic techniques that work for both linear and nonlinear systems.

1. You can always check to see if a given function is a solution (no wrong answers).

For example, consider the initial-value problem

$$\begin{aligned} \frac{dx}{dt} &= 2y - x \\ \frac{dy}{dt} &= y \end{aligned} \quad (x_0, y_0) = (2, 1).$$

Using the vector notation

$$\mathbf{Y}(t) = \begin{pmatrix} x(t) \\ y(t) \end{pmatrix}$$

we can write this IVP as

$$\frac{d\mathbf{Y}}{dt} = \begin{pmatrix} 2y - x \\ y \end{pmatrix}, \quad \mathbf{Y}(0) = \begin{pmatrix} 2 \\ 1 \end{pmatrix}.$$

Claim: The function

$$\mathbf{Y}(t) = \begin{pmatrix} e^t + e^{-t} \\ e^t \end{pmatrix}$$

solves the IVP.