

Laplace transforms and second-order equations

First let's review the method of Laplace transforms.

So far we have only applied the Laplace transform to first-order equations. Today we start to consider second-order equations.

Recall the rule for Laplace transforms of derivatives:

$$\mathcal{L}\left[\frac{dy}{dt}\right] = s\mathcal{L}[y] - y(0)$$

What does this say about

$$\mathcal{L}\left[\frac{d^2y}{dt^2}\right]?$$

Now that we have this rule, we also need to add to our table of Laplace transforms. Since sine and cosine often appear as parts of the solutions to second-order equations, let's determine their Laplace transforms.

There are a number of ways to compute these transforms—using integration by parts, using Euler's formula, and even using the fact that sine and cosine are solutions to certain very special second-order equations. Last Wednesday, we saw that

$$\mathcal{L}[e^{i\omega t}] = \frac{1}{s - i\omega}.$$

Let's use this to determine $\mathcal{L}[\sin \omega t]$ and $\mathcal{L}[\cos \omega t]$.

Now that we know the transforms of sine and cosine, let's see how we use them.

Example. Compute

$$\mathcal{L}^{-1} \left[\frac{2s + 1}{s^2 + 9} \right].$$

Now for a little practice with the third rule for transforms:

Example. Compute

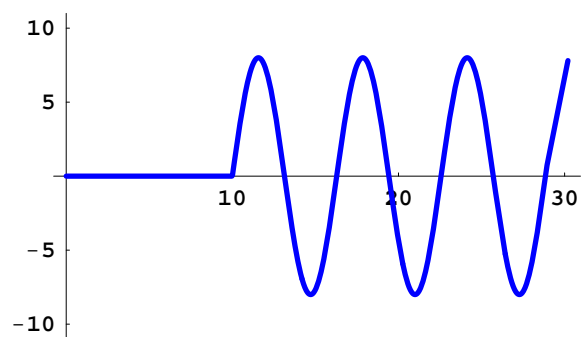
$$\mathcal{L}^{-1} \left[\frac{8e^{-10s}}{(s^2 + 9)(s^2 + 1)} \right].$$

Let's use what we have learned to solve the initial-value problem

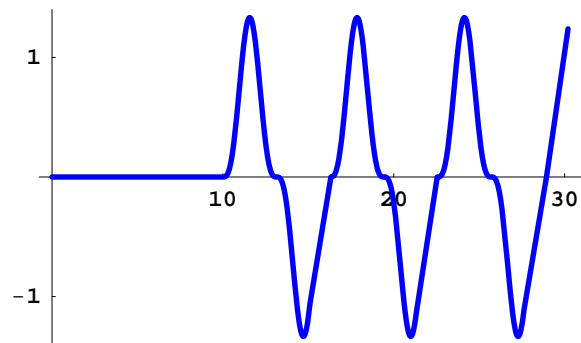
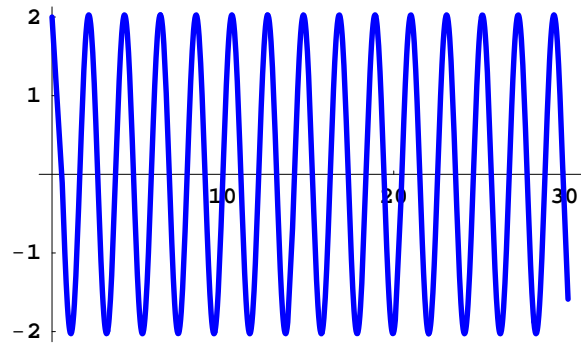
$$\frac{d^2y}{dt^2} + 9y = 8u_{10}(t) \sin(t - 10), \quad y(0) = 2, \quad y'(0) = 1.$$

Here is a graph of the forcing function

$$8u_{10}(t) \sin(t - 10).$$



Here are the graphs of the two functions that combine to give us the desired solution.



Here is the graph of the solution

